

LITTLE FAIRY PUBLIC SCHOOL

Holidays Home Work(2024 -2025) CLASS: 5

Summer Vacations will commence from 20th May' 24 to 30th June' 24. The school will reopen from 1st July'24 (Monday). The summer vacations are here, so relax and enjoy yourself. Spend time playing games with your family members, listening to stories from your grandparents, reading story books, cleaning up your room, or taking up a hobby- be it cycling, swimming, playing cricket or skating! We would also like all of you to spend some time every day to revise the concepts done in different subjects. Another important aspect of a child's overall development is directly related to the values that he/she embodies. No education can be complete without inculcating values. In today's materialistic world value system seems to have been relegated to the background. Therefore, we would like to encourage parents to spend some quality time with their children. Holiday homework has been designed in such a way that the students will get a chance to inculcate moral values, reading habit as well as engage themselves in meaningful pursuits that will enhance their comprehension and reasoning skills along with honing their aesthetic sense.

Note :-Revise all the work done in the class .

The homework has to be done separately subject wise in note books, beautifully

Do the given assignment neatly in assignment sheets and submit it after vacation .

International Yoga Day (21st June): learn simple yoga Asanas.


Click the pictures and share it with class teacher.

English (do the given work in your class notebook)

1. Grandparents are special people. Interview one of your grandparents and find out
 - a) Your grandfather /mother's full name.
 - b) When & where he/ she was born.
 - c) Where he / she went to school.
 - d) What work he / she did.
 - e) One memorable moment had happen to him / her .
2. Cut an English news headline daily (5 DAYS) and paste it in your notebook .Write 4-5 lines about it in your words. Write only positive news.
3. Write 30 new words with meanings from the lessons learnt till now in alphabetical order.
4. Read a story book and write the names of its characters and short summary on A4 sheet. Make its drawing also.
5. Make a small album of your 5 favourite foods. Write the name at the top...Paste or draw their pictures and write two three lines about it.(nutrient value and composition)(on A4 size sheets)

Maths (do the given work in your class notebook)

1. $1000000 \div 100000 = 10$ $1000000 \div 10000 = 100$ $1000000 \div 1000 = 1000$ $1000000 \div 100 = 10000$ $1000000 \div 10 = 100000$ $1000000 \div 1 = 1000000$ $1000000 \div 1000000 = 1$
2. $1000000 \div 100000 = 10$ $1000000 \div 10000 = 100$ $1000000 \div 1000 = 1000$ $1000000 \div 100 = 10000$ $1000000 \div 10 = 100000$ $1000000 \div 1 = 1000000$
3. $1000000 \div 100000 = 10$ $1000000 \div 10000 = 100$ $1000000 \div 1000 = 1000$ $1000000 \div 100 = 10000$ $1000000 \div 10 = 100000$ $1000000 \div 1 = 1000000$
4. $1000000 \div 100000 = 10$ $1000000 \div 10000 = 100$ $1000000 \div 1000 = 1000$ $1000000 \div 100 = 10000$ $1000000 \div 10 = 100000$ $1000000 \div 1 = 1000000$



Across

- 1. relocation
- 6. clashed
- 7. meager
- 8. beginning
- 11. farming
- 12. make
- 13. meeting
- 14. ethical

Down

- 2. yearly
- 3. sensible
- 4. caring
- 5. colleague
- 9. fierce
- 10. dive

moral	fought	agriculture	thoughtful	intense	plunge
origin	transfer	annual	sparse	associate	create
encounter	realistic				

2. Find the opposite gender of the given nouns in the grid and highlight it with any colour

Wife, Nun, Lady, Tigress, Authoress, Wizard, Horse, Sir, Daughter, Queen

G	E	N	T	L	E	M	A	N	X
A	B	W	I	T	C	H	U	O	M
M	K	C	G	D	J	W	T	S	A
A	I	F	E	E	K	N	H	Z	D
R	N	G	R	P	M	A	O	T	A
E	G	H	I	S	O	N	R	D	M
H	U	S	B	A	N	D	C	P	Y
Q	B	C	U	V	K	M	R	E	F

□□□□□□

प्रश्न-1 निम्नलिखित संकेतों की सहायता से शब्द पहली हल कीजिए -

(1) आ	(2)		(3)प		
(4)	म	र्थ		(5)अ	
मा		(6)क			(7)लो
(8)	वी				
(9)	र्थ	(10)क		न	

ऊपर से नीचे (पर्यायवाची)

1 गगन

2. अमृत.....

5. घमंड.....

6. स्वर्ण.....

7. अँख.....

बाएँ से दाएँ (विलोम)

3. उत्थान.....

4. विरोध

8. प्राचीन.....

9. अनर्थ.....

10. सरल.....

प्रश्न 2 - वर्ग में लिखे संज्ञा शब्दों से कविता को पूर्ण कीजिए -

भाग	सागर	ई-मेल
कंप्यूटर	यंत्र	अभिमान
अंतरिक्ष	बटन	दोस्तों
विज्ञान	मौसम	जीवन

जब से आया है ----- , -----हो गया है आसान ।

क्या गुणा, क्या ----- , कर देता मुश्किल आसान ।

यह -----है अनोखा , नवयुग का है -----

सारे प्रश्नों को कर देता हल, सूचना सारी देता झटपट ।

----- दबाते चिट्ठी पहुँचाता , दूर ----- का हाल बताता ।

----- का रूप बताता, ----- से समाचार लाता ।

----- की गहराई नापता , तरह-तरह के खेल दिखाता।

----- पर चैट कराता , ज्ञान के सारे राज़ बताता ।

----- का अनोखा आविष्कार, जीवन इसने दिया सँवार

प्रश्न 3 - निम्नलिखित शब्दों के पर्यायवाची शब्द वर्ग-पहेली से छाँटकर लिखिए -

- क) शरीर
- ख) कृपा
- ग) कपड़ा
- घ) अग्नि
- ङ) पक्षी
- च) गृह
- छ) गणेश

द	पा	व	क
या	का	या	व
ख	आ	वा	स
ग	जा	न	न

प्रश्न 4 - निम्नलिखित भाषाओं की लिपियाँ बताओ -

(क) हिन्दी

(ख) उर्दू

(ग) अंग्रेजी

(घ) पंजाबी

5. नीचे लिखे गद्यांश को पढ़कर उसमें आए मुहावरों को लिखिए—

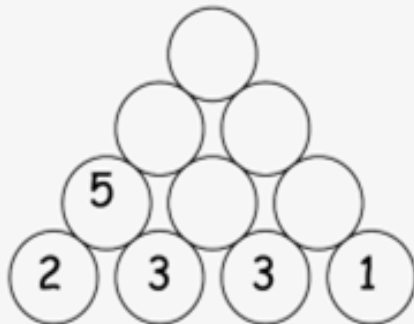
श्रीराम और लक्ष्मण राजा दशरथ की आँखों के तारें थे। उनका व्यवहार अयोध्यावासियों का मन मोह लेता था। दशरथ द्वारा कैकेयी को दिए वचन को पूरा करने के लिए श्रीराम ने सीता और लक्ष्मण के साथ वन जाने की ठान ली। वन में उन्होंने ऋषि-मुनियों को राक्षसों के भय से मुक्त किया। सीता जी ने कुटिया के बाहर जब स्वर्ण मृग को देखा तो उसे पकड़ने की इच्छा श्रीराम से की पर देखते ही देखते वह वहाँ से नौ दो ग्यारह हो गया। सीता जी की जिद पर श्रीराम ने उसका पीछा किया और स्वर्णमृग के रूप में मारीच को पाकर वे दंग रह गए। वापिस कुटिया में आने पर सीता जी को वहाँ न पा उनकी आँखों के सामने अँधेरा छा गया। सीता को ढूँढने के लिए उन्होंने आकाश-पाताल एक कर दिया और रावण से युद्ध होने पर उनकी सेना के दौत खट्टे कर दिए। विभीषण को लंका का राजा बना दिया। जब वह अयोध्या आए तो अयोध्यावासियों ने घी के दिए जलाकर उनका स्वागत किया।

□□□ □□□□□□□ □□□□ □□□□□□□□ □□ □□□□

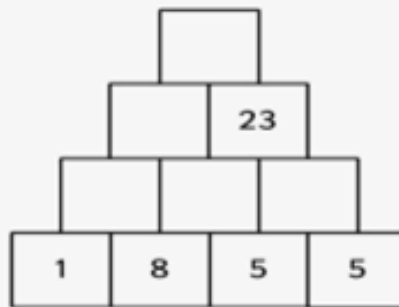
Mathematics

WALL PUZZLE...

The number in the upper row is the sum of the two numbers just below it. This is called a wall puzzle. Find the answers to the following wall puzzles.



CALCULATION TIME...



Write the numerals in Hindu Arabic and add the numbers across to complete the given table.

Roman Numbers					Sum in Roman Numeral	Sum in Hindu Arabic
IV	IX	VIII	XLVII	XLVIII		
XXXVII I	XIX	XX	XXXIV	XXXI V		
XXXIX	XXXVI I	XXV I	XXVII	XXII		

A. Using the numbers in the number bank, create a six digit number based on the clues given.



1. What is the smallest six-digit number you can make?

2. What is the largest six-digit number you can make?

3. What is the smallest six-digit number you can make that ends with an odd number?

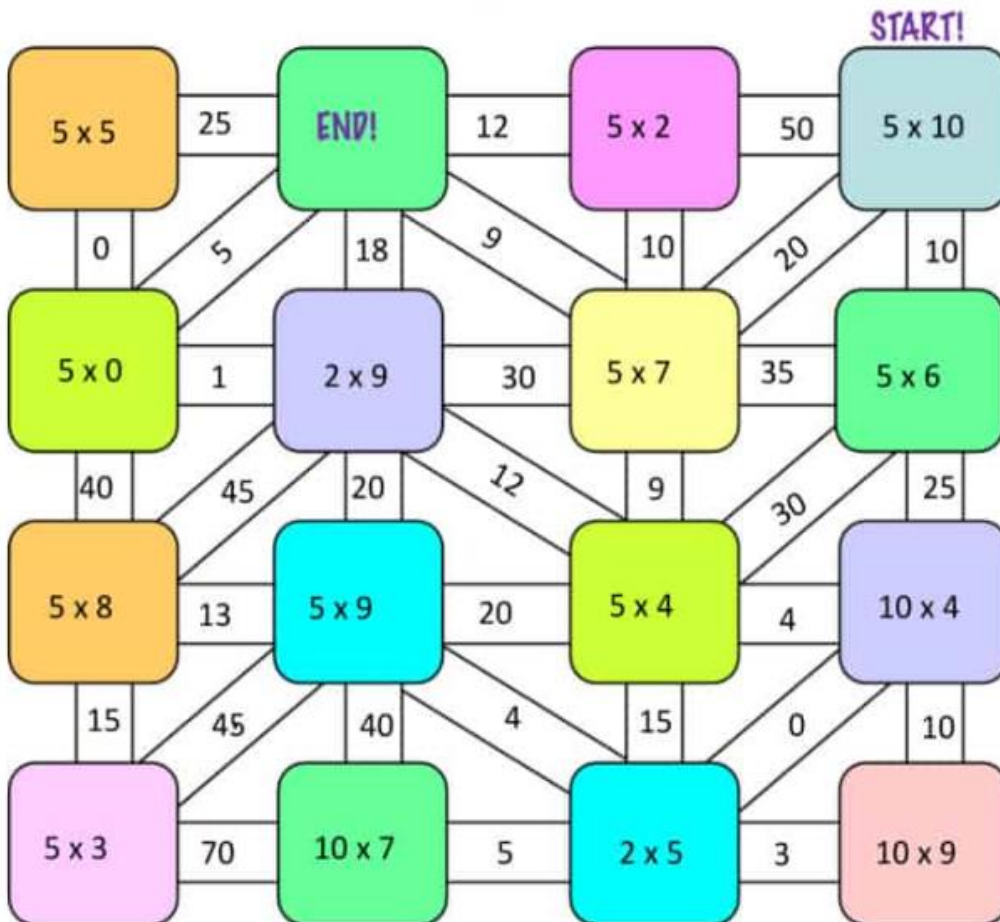
4. What is the largest six-digit number you can make that has 8 in the hundreds place?

5. What is the smallest six-digit number you can make that begins with 5?

Activate
Go to Sett

Begin at start and follow the correct answers through the maze until you get to end

MULTIPLICATION MAZE!



C. Country A has a population of 7,27,31,291 . The area of the country is 19,57,963 sq. km. Another country B has a population of 7,64,32,181 and the area of the country is 12,86,263 sq. km.

Answer the following questions.

1. What is the total population of country A and country B ?

2. What is the difference in the area of country A and country B ?

3. Estimate the population of each area to the nearest thousand ?

Complete the given multiplication grid

X	2325	5640	1121	2240	4487	8961
5						
14						
38						

E. Complete the division grid

÷	7200	120	2160	384	576	960
4						
6						
8						

Science

(Do the following questions on A4 size sheet and represent it beautifully)

1. Raman spends his holidays sitting in the front of the computer while Sushil plays outdoor game. Who is doing right and why ?

2. . Asha wants to grow a some few potato plants in her kitchen garden. Suggest an easy and pratical method that she can use to grow them quickly .

3. What would happen if seeds are sown in the field without ploughing it ?

4. Write any four things which we get from plants.
a) b) c). d)

5. Write down the Word that describes each of the following:

- a. A frame made of bone that supports our body.
- b. A bone in the spine.
- c. The bones of the head.
- d. Animals with no skeleton.
- e. The parts of the body that allow our bones to move.

6. Write down the name of one:

- a. A flat bone
- b. Long bone
- c. Short bone
- d. Irregular bone

Social Science

1. Fill in the blanks :-

1. Globe is the most _____ way of looking at the size, shape and location of places on the earth.
2. We normally use _____ instead of globes.
3. A book of maps is called an _____.
4. Some of the elements of a map are _____, and _____.
5. Usually maps are drawn with _____ at the top.
6. To be able to map the area accurately maps are drawn to a _____.
7. The scale of a map is the _____ between distance shown on the map and the actual distance on the ground.
8. The scale of a map is often shown as '1cm:100 km' and this is called a _____.
9. A _____ is a shape or sign that is used to represent something.
10. The legend is literally ' _____ ' to the map.
11. _____ on a map are used for showing different features.
12. There are _____ Continents and _____ Oceans.
13. North, south, east and west are the four _____ directions.

Fill in the blanks:

1. The variation in physical features of the earth is called _____.
2. Highlands rising from the surrounding area with a flat top is called _____.
3. Flat and low-lying lands are called _____.
4. Several mountains may join together to form a _____ or a _____.
5. Mountains have peaks which may be _____ or _____ in shape.
6. _____ is a deep valley with steep sides of rock.
7. In the middle stage, the river develops loops called _____.
8. _____ are large areas covered with sand.

Name the following:-

1. Highest land forms. _____.
2. The largest hot desert. _____.
3. The largest cold desert is _____.
4. Hills of sand _____.
5. Two famous deserts _____, _____.
6. An example of plateau in India _____.