


# Little Fairy Public School

HOLIDAYS HOMEWORK(2025-26)

CLASS - 2



Summer vacations will begin from 13<sup>th</sup> May 2025 (Tuesday) and continue till 30<sup>th</sup> June 2025(Monday) . The school will reopen on 1<sup>st</sup> July 2025 (Tuesday)

Dear Children, Summer Vacation is synonymous with fun and frolic, going for picnics ,visiting Nani's house, Dadi's house, watching your favourite shows on television, playing for long hours, exploring new places and much more.....But, dear children, there is a lot more you can do to make your vacation more interesting and meaningful. We have planned some interesting activities for you. So, don't sleep till late in the morning. Try getting up early and go for a morning walk with your parents, breathe fresh air and avoid playing out in sun.

The holiday homework has been designed not just to revise what you've learned in school, but also to spark your creativity, build good habits, and strengthen your thinking skills. Each activity has a purpose — to help you learn while having fun. We also encourage you to spend meaningful time with your loved ones, as this helps in developing strong values and a caring nature.

Wishing you a joyful, creative, and enriching summer vacation — full of laughter, learning, and love!

**Note:-** Assignment sheets are enclosed for practice. Submit these sheets in a nice handmade folder/bag ( made with the help of your child) by 4<sup>th</sup> July 2025.

**Make a seprate three in one notebook for holiday homework .**

## ENGLISH

### **1. Cursive Writing Practice**

Complete **pages 3–20** in your cursive writing book to improve your handwriting.

### **2 “Word Endings Wizard!”** Make 3 or 4 letter words using or ending with each

of these sounds:

**Endings: at, in, us, up, it, ap, nd**

Write them beautifully in tabular way and decorate each word with a small

drawing on A4 size sheet. (e.g., a hat for "gate").





### 3. Spell Check Challenge!

Every week, ask someone to give you a **spell check** of **10 words** from your **English textbook (Ch 1 to 3)**.

Write down the words and marks you scores .



### 4. Read and Reflect – Story Time!:

Read any one or two stories from the

- Panchatantra Tales ,
- Tenali Raman Stories or
- Amar Chitra Katha – Illustrated Books

Now write on A4 size sheet



- Your Favourite Character (with a picture)
- 1-2 lines on why you like it Use colourful drawings and stickers!
- Activity: Make stick two stick Puppet of main two character of your story and Decorate it them with googly eyes, buttons, yarn or colours.
- Prepare your self to narrate your story using your puppets after vacation.

5. Make flashcards on Action words (any 5) ➤ Roll no. 1 to 20

6. Make flashcards on naming word with picture (any 5) ➤ Roll no. 21 to 40

### हिन्दी

1. दो, तीन ,चार अक्षरों (मात्रा के साथ )वाले 20-20 शब्द लिखिए ।

2. किन्ही 10 सब्जियों और फलों के नाम चित्र सहित लिखिए ।

3. राष्ट्रीय प्रतीक (5 ):- A4 पृष्ठ लें

• हर पृष्ठ पर निम्नलिखित कार्य करें:

• हर पृष्ठ पर एक राष्ट्रीय प्रतीक से संबंधित कार्य करें।

- प्रत्येक पृष्ठ पर एक प्रतीक जैसे –राष्ट्रीय ध्वज –तिरंगा , राष्ट्रीय गान –जन गण्य मन ,  
राष्ट्रीय चिह्न –सिंह स्तंभ (चार शेर) राष्ट्रीय गीत – वंदे मातरम्,, राष्ट्रीय पशु – बाघ , राष्ट्रीय पक्षी – मोर, राष्ट्रीय फूल – कमल, राष्ट्रीय फल – आम , राष्ट्रीय पेड़ – वट वृक्ष , राष्ट्रीय नदी – गंगा, राष्ट्रीय खेल – हॉकी, राष्ट्रीय मुद्रा – भारतीय रुपया

हर पृष्ठ पर एक राष्ट्रीय प्रतीक से जुड़ा चित्र, 2-3 वाक्य, और रचनात्मक सजावट होनी चाहिए।





कवर पेज:

- पहले पृष्ठ पर बड़ा सा शीर्षक लिखें: “राष्ट्रीय प्रतीक
- नीचे छात्र या छात्रा का नाम, कक्षा, रोल नंबर लिखें।
- **Maths**



### 1. Number Names (1 to 100)

- Write number names from 1 to 100 in your three in one notebook.
- Use **color pencils or crayons** to decorate each group of ten in a different color.

Example: 1–10 in red, 11–20 in blue, etc.

---

### 2. Forward Counting (1 to 200)

- Write numbers from 1 to 200.
- **Circle odd numbers in red and even numbers in blue.**

You can make a **number grid** to make it look more fun!

---

### 3. Math Practice (20 sums each)

- In thin separate notebook, do:
  - + 20 Addition sums , — 20 Subtraction sums , ✖ 20 Multiplication sums
  - Use objects or pictures if needed to make it attractive !

---

### 4. Shape Scenery (Craft Activity)

- Use **cut-outs of square, rectangle, triangle, and circle** from **colored glazed paper**.
- Make a **scenery** (like a house, sun, trees, mountains, etc.) on an A4 sheet.



### Environmental Studies

1. Write any 5 good manners you follow at home and in school
2. Paste pictures of different food groups. Write the benefits of each food group.
3. 5th June is World Environment Day make any thing specials by using waste like box , newspaper , jar , bins , cartons , laces , buttons color magazine, paints etc.





#### 4. Internal and External Organs (A-3 Sheet)

- Write the **names** of internal and external organs.
- Paste colored Pictures and write their name.



*Examples: Internal Organs:* Brain, Heart, Lungs, Stomach etc.

- **External Organs:** Eyes, Ears, Nose, Hands, Legs

#### 5. Road Signs Diagram (A-3 Sheet)

Draw and color **important road signs**. Label each sign.

*Examples:* Stop , No Parking, Zebra Crossing, School Ahead, Speed Limit etc .

Use a **traffic theme border** and write a safety slogan on the sheet  
(e.g., "Follow rules, stay safe!")



#### World Environment Day(Thursday , 5 June, 2025)

**Let's Turn Trash into Treasure!"**

To celebrate **World Environment Day** (5th June), create a useful or decorative item using any **waste/recycled materials** available at home. You can use old boxes, newspapers, jars, bins, buttons, laces, magazines, cartons, bottle caps, fabric pieces, or any scrap materials.



#### FATHER'S DAY (Sun, 15 Jun, 2025)

Summers are here and to beat the heat of this scorching sun .Take your mother's help and make a dish of yummy fruit salad for your father to give him a special surprise on Father's Day. (Click pictures while making and serving the fruit bowl to your father. Paste the picture on A4 size sheet also writes the ingredients, nutrient value and recipe.



#### YOGA DAY (Saturday , 21 June, 2025)

As part of **International Yoga Day on 21st June**, all students are encouraged to practice simple Yoga Asanas at home. So, on Yoga Day, let's celebrate by moving, stretching, and breathing together. Enjoy exploring and expressing yourself through yoga! Parents are requested to join their kids and click pictures having fun while getting healthy. YOGA DAY

Don't forget to click pictures while doing them and share them with your class teacher.



shutterstock.com • 421965970

Have a great  
**Summer**  
VaCation!



Name: \_\_\_\_\_

Roll No: \_\_\_\_\_

**Q1. Pick out the vowels and write in the given box :-**

a) Orange

b) Turnip

c) Mother

d) Farmer

e) Television

f) Monkey

g) Inkpot

**Q2. Write the name of vegetables :-**

a) I can be fried, boiled and mashed.

P \_\_\_\_ T \_\_\_\_

b) I am red and round.

T \_\_\_\_ M \_\_\_\_ O

**Q3. Write the rhyming words : -**

a.) day \_\_\_\_\_

(c) man \_\_\_\_\_

b.) wood \_\_\_\_\_

(d) fox \_\_\_\_\_

**Q4. Circle the noun words in the given passage.**

Mom baked a cake for Jane. She took it out of the oven. She put the cake on the table and called Jane and her friends. The boys came running to the room but let the girls take the cake before them.












Q5. Fill in the blanks with correct action words from the brackets: -

- a) Jai is \_\_\_\_\_ in his bed. ( *sleeping, dancing* )
- b) The children are \_\_\_\_\_. ( *reading, sweeping* )
- c) The aeroplane is \_\_\_\_\_ high up in the sky. ( *flying, jumping* )
- d) Ria is \_\_\_\_\_ loudly. ( *walking, singing* )
- e) I am \_\_\_\_\_ with my dog. ( *playing, watching* )
- f) I am \_\_\_\_\_ television my sister. ( *watching, eating* )
- g) Gina is \_\_\_\_\_ Chinese food. ( *helping, eating* )
- h) My mother is \_\_\_\_\_ dinner for us. ( *reading, making* )
- i) David was \_\_\_\_\_ fast. ( *running, sleeping* )
- j) Rahul is \_\_\_\_\_ with brush and paint. ( *dancing, painting* )

Q6. Write the names of young ones of the following animals: -

- a) Cat \_\_\_\_\_ (b) dog \_\_\_\_\_ (c) horse \_\_\_\_\_
- d) kangaroo \_\_\_\_\_ (e) lion \_\_\_\_\_ (f) duck \_\_\_\_\_
- g) cow \_\_\_\_\_ (h) hen \_\_\_\_\_ (i) pig \_\_\_\_\_

Q7 Complete the story by filling the blanks, use the pictures as clues: -

One day the  \_\_\_\_\_ was shining. The  \_\_\_\_\_ was sleeping. The  \_\_\_\_\_ was sleeping. But the  \_\_\_\_\_ saw a  . "HELP!HELP!" she cried. The \_\_\_\_\_ and the  \_\_\_\_\_ hide inside a  . The \_\_\_\_\_  Flew into the  . The \_\_\_\_\_  run away. The \_\_\_\_\_ 

Went on shining .



## ENGLISH GRAMMAR

(1) Change the Gender:

Male	Female	Male	Female
Uncle		Grandfather	
Brother		Prince	
Father		Boy	
Son		Cow	
King		Peacock	

(2) Change the following words from singular into plural.

a. Tax \_\_\_\_\_

b. Chilly \_\_\_\_\_

c. Wife \_\_\_\_\_

c. Peach \_\_\_\_\_

d. Key \_\_\_\_\_

d. Foot \_\_\_\_\_

e. City \_\_\_\_\_

e. River \_\_\_\_\_

3. Underline the common noun and circle the proper noun.

a. Hockey is my favourite sport.

b. India is a big country.

c. The Nile is the largest river.

d. Akbar was a great king.

(6) Arrange these words in alphabetical order.

a. green yellow red black pink

\_\_\_\_\_

b. foot knee toe hip chin











\_\_\_\_\_

c. tip top turn tap tear

\_\_\_\_\_

(7) Fill in the blanks with appropriate collective nouns used for the following given pictures. Clues are given in the hint box:

Hint box				
flock,	caravan,	pride,	school,	swarm,
pack,	litter,	army,	herd,	brood

1. Ants 	6. Fish 
2. Cows 	7. Bees 
3. Chickens 	8. Sheep 
4. Wolves 	9. Lions 
5. Kittens 	10. Camels 

Activate  
Go to Setti

## Fruit Riddles

1. I'm red, round, juicy, and grow on trees. What am I?

**Answer:** A \_\_\_\_\_ E

2. I'm yellow outside, soft inside, and monkeys love me. What am I?

**Answer:** B \_\_\_\_\_ A

3. I'm small, round, purple or green, and grow in bunches. What am I?

**Answer:** G \_\_\_\_\_ S

4. I'm orange, juicy, round, and full of vitamin C. What am I?

**Answer:** O \_\_\_\_\_ E



प्रश्न.9 निम्नलिखित वाक्यों में संज्ञा शब्दों को रेखांकित कीजिए :-

क) बगीचे में हरियाली है।

ख) राजा बैठा है।

ग) राधा सुंदर गाती है।

घ) तितली उड़ गई।


ङ) यह मेज सुंदर है।

प्रश्न. सही मात्रा लगाकर शब्द बनाइए :



शर

\_\_\_\_\_



गलब

\_\_\_\_\_



मछल

\_\_\_\_\_



हरन

\_\_\_\_\_



रलगड़

\_\_\_\_\_



पध

\_\_\_\_\_

प्रश्न. चित्र देखकर नाम लिखें :



\_\_\_\_\_



\_\_\_\_\_



\_\_\_\_\_



\_\_\_\_\_



## 1. फूलों के नाम छांट कर लिखो

पा	रि	जा	त	ल
मे	गु	फ	म	च
कि	ला	क	सा	मे
श	ब	दा	लि	ली
ज्ञ	गें	कु	सु	म


प्रश्न 1. दिए गए वाक्यों में इ या ई की मात्रा वाले शब्द लिख कर वाक्य पूरे करें-

चिड़िया	हिन्दी	पानी	गिलास	जिराफ़	मकड़ी
डाकिया	साइकिल	दीपावली	चमेली	तितली	गणित
फुलझड़ी	मछली	माली	पपीता	इमली	पहिया

- कमल \_\_\_\_\_ से भरा \_\_\_\_\_ लाया ।
- \_\_\_\_\_ उड़कर बाहर गई ।
- \_\_\_\_\_ का \_\_\_\_\_ निकल गया है , उसे मत चलाओ ।
- \_\_\_\_\_ और \_\_\_\_\_ मेरे प्रिय विषय हैं ।
- \_\_\_\_\_ जल की \_\_\_\_\_ है, जीवन उसका \_\_\_\_\_ है ।
- \_\_\_\_\_ पर \_\_\_\_\_ बिक रही थी ।
- मीठा - मीठा \_\_\_\_\_ काट कर खाओ ।
- पेड़ पर खट्टी - मीठी \_\_\_\_\_ लटक रही है ।
- छत पर \_\_\_\_\_ जाला बना रही थी ।
- \_\_\_\_\_ हरी - हरी घास खा रहा था ।
- \_\_\_\_\_ के लिए पत्र लाया ।
- \_\_\_\_\_ के फूल पर रंग - बिरंगी \_\_\_\_\_ बैठी है ।




प्रश्न 2. चित्र को देखकर अनुस्वार या अनुनासिकवाले शब्द लिखें-


















चित्रों को देखकर वन्य प्राणियों के नाम लिखो।

भालू	चीता	तेंदुआ	हाथी	गैंडा	हिरन
गोरिल्ला	लोमड़ी	भेड़िया	बंदर	शेर	ज़ेबरा













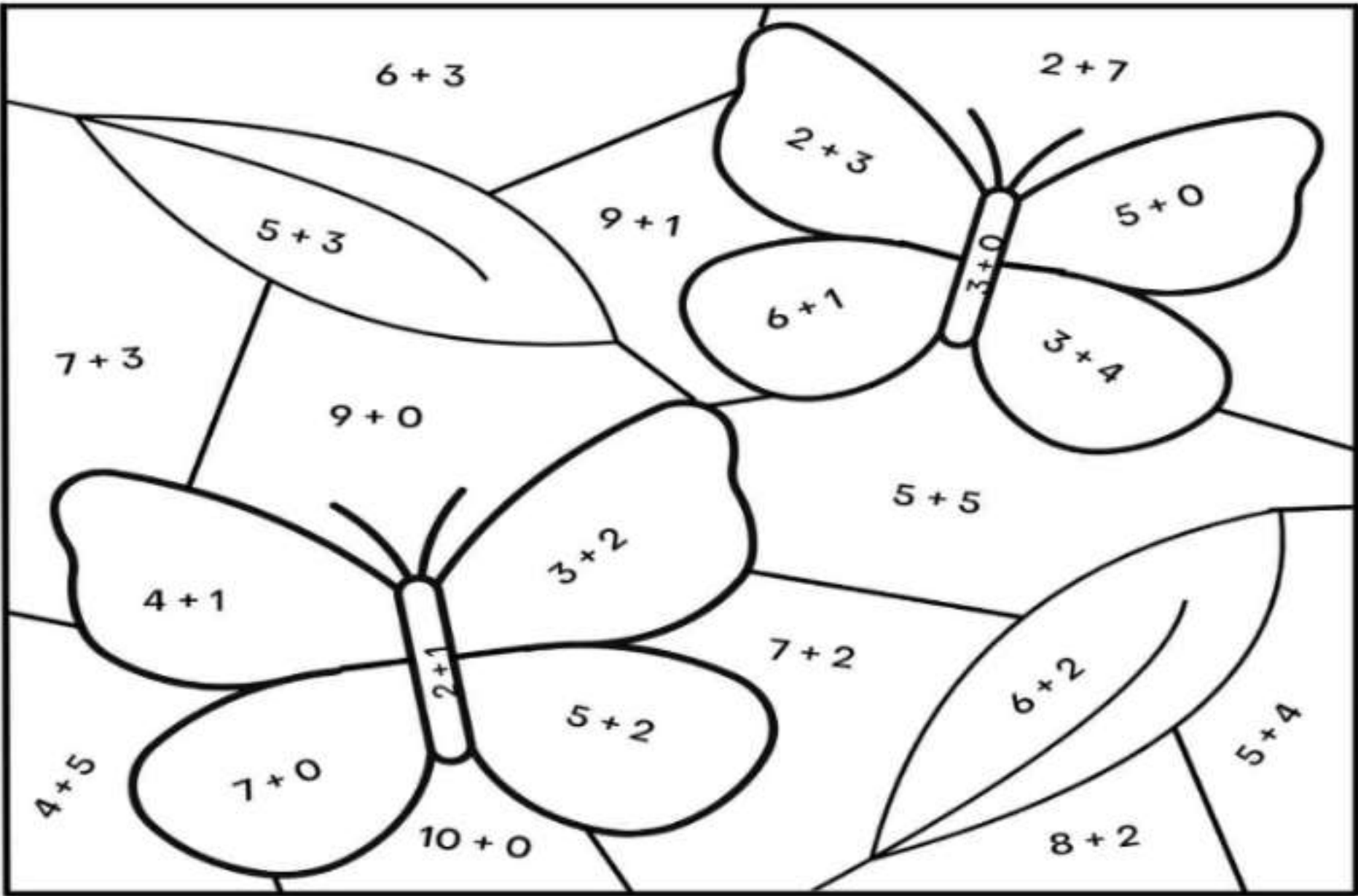








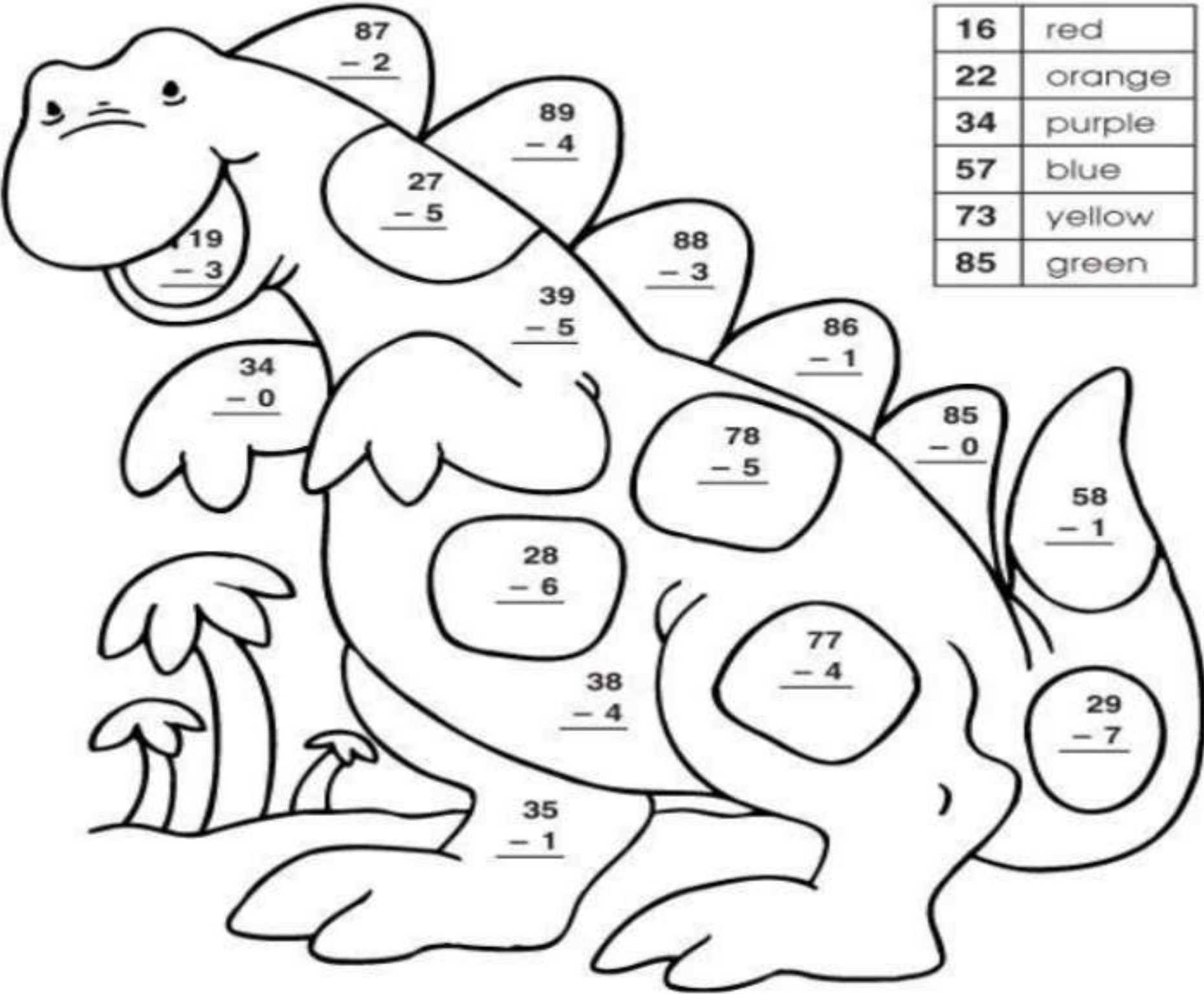
Do addition and colour the picture



- Directions:
1. Pick an addition problem to solve.
  2. Then color in the section using the key below.
  3. Repeat until each problem is solved and section is colored.

Blue	9	Black	3	Green	8
Orange	7	Purple	10	Yellow	5

Subtract. Color the picture using the color code.



Color Code	
16	red
22	orange
34	purple
57	blue
73	yellow
85	green



Q2.a) Write down the following games under the correct heading.

cricket, ludo , blocks, volleyball, puzzles , kho-kho, chess, football, hockey

Indoor Games
--------------

Outdoor Games
---------------

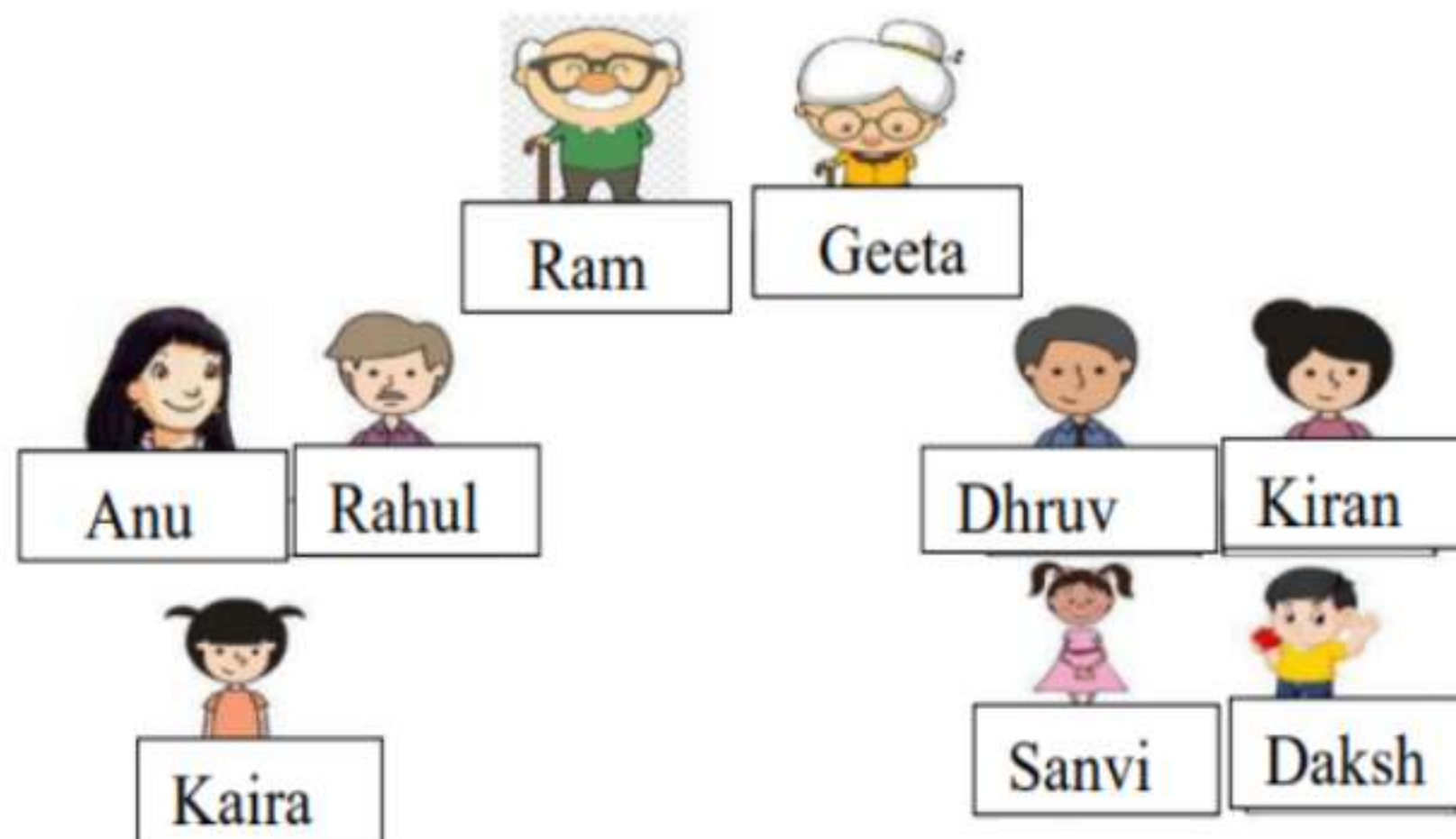
b) Name two games that can be played with more than two people.

--

--

Activate Windows

Q3. Look at the picture and complete the sentences.



a) Ram is Sanvi's \_\_\_\_\_.

e) Dhruv is Daksh's \_\_\_\_\_.

b) Geeta is Kaira's \_\_\_\_\_.

f) Kiran is Kaira's \_\_\_\_\_.

c) Kaira is Sanvi's \_\_\_\_\_.

g) Sanvi is Daksh's \_\_\_\_\_.

d) Dhruv is Kaira's \_\_\_\_\_.


h) Anu is Sanvi's \_\_\_\_\_.



# fruit word search

1. Write the name of the fruit in the space provided.
2. Find the word in the word search puzzle.  
(Words only run across and down.)

s	t	r	a	w	b	e	r	r	y
o	r	a	n	j	e	p	e	a	r
r	m	e	h	o	a	e	w	n	a
a	b	a	b	a	n	a	n	a	p
n	x	p	a	i	r	c	e	y	p
g	r	a	p	e	s	h	k	a	l
e	p	i	n	e	a	p	p	l	e



Q4. Fill in the boxes with the correct hobbies.

cooking , dancing, swimming, drawing, gardening















**Q1. Write in expanded form-**

a)  $326 = \boxed{\phantom{000}} + \boxed{\phantom{000}} + \boxed{\phantom{000}}$

b)  $319 = \boxed{\phantom{000}} + \boxed{\phantom{000}} + \boxed{\phantom{000}}$

c)  $758 = \boxed{\phantom{000}} + \boxed{\phantom{000}} + \boxed{\phantom{000}}$

d)  $685 = \boxed{\phantom{000}} + \boxed{\phantom{000}} + \boxed{\phantom{000}}$

e)  $903 = \boxed{\phantom{000}} + \boxed{\phantom{000}} + \boxed{\phantom{000}}$

**Q2. Write in short form -**

a)  $700 + 70 + 1 = \boxed{\phantom{000}}$

b)  $600 + 20 + 5 = \boxed{\phantom{000}}$

c)  $800 + 70 + 3 = \boxed{\phantom{000}}$

d)  $500 + 80 + 0 = \boxed{\phantom{000}}$

e)  $900 + 60 + 3 = \boxed{\phantom{000}}$

**Q3. Fill in the blanks with  $<$  ,  $>$  or  $=$**

a)  $346 \underline{\hspace{2cm}} 248$

b)  $972 \underline{\hspace{2cm}} 846$

c)  $108 \underline{\hspace{2cm}} 245$

d)  $725 \underline{\hspace{2cm}} 725$

e)  $669 \underline{\hspace{2cm}} 325$

**Q4. Write number names -**

a)  $456$  \_\_\_\_\_

b)  $305$  \_\_\_\_\_



Name: \_\_\_\_\_

Roll No: \_\_\_\_\_

**Q1. Write the numbers by skip counting -****a) Skip counting in 2s**

$$16 = \bigcirc \bigcirc \bigcirc \bigcirc \bigcirc$$

**b) Skip counting in 3s**

$$12 = \bigcirc \bigcirc \bigcirc \bigcirc \bigcirc$$

15

**c) Skip counting in 4s**

$$44 = \bigcirc \bigcirc \bigcirc \bigcirc$$

**Q2. Arrange the following numbers in ascending order -****a) 128 , 158 , 19 , 285**

\_\_\_\_\_, \_\_\_\_\_, \_\_\_\_\_, \_\_\_\_\_

**b) 725 , 843 , 901 , 240**

\_\_\_\_\_, \_\_\_\_\_, \_\_\_\_\_, \_\_\_\_\_

**Q3. Arrange the following numbers in descending order -****a) 116 , 157 , 98 , 240**

\_\_\_\_\_, \_\_\_\_\_, \_\_\_\_\_, \_\_\_\_\_

**b) 118 , 120 , 115 , 125**

\_\_\_\_\_, \_\_\_\_\_, \_\_\_\_\_, \_\_\_\_\_

**Q4. Word problems -****a) There are 26 apples in one basket and 19 apples in another. How many apples are there in total?**

\_\_\_\_\_

**b) A shop had 50 toys. 17 toys were sold. How many toys are left?**

\_\_\_\_\_



Q1.Circle the correct answer.

- a. The greatest number  $\longrightarrow$  129      198      139
- b. The smallest number  $\longrightarrow$  170      167      111
- c.  $100 + 20$   $\longrightarrow$  120      102      122
- d. 1hundred + 6 ones  $\longrightarrow$  160      106      101
- e.  $100 + 50 + 1$   $\longrightarrow$  115      150      151
- f. 1hundred + 7tens  $\longrightarrow$  107      177      170



Q2. Colour the boxes ( in the given colour) with the correct answers:

- a. The number between 120 and 122 ( blue)
- b. The odd number just before 197 (yellow)
- c. The even number just after 198 (green)
- d. The number just before 124 ( pink)

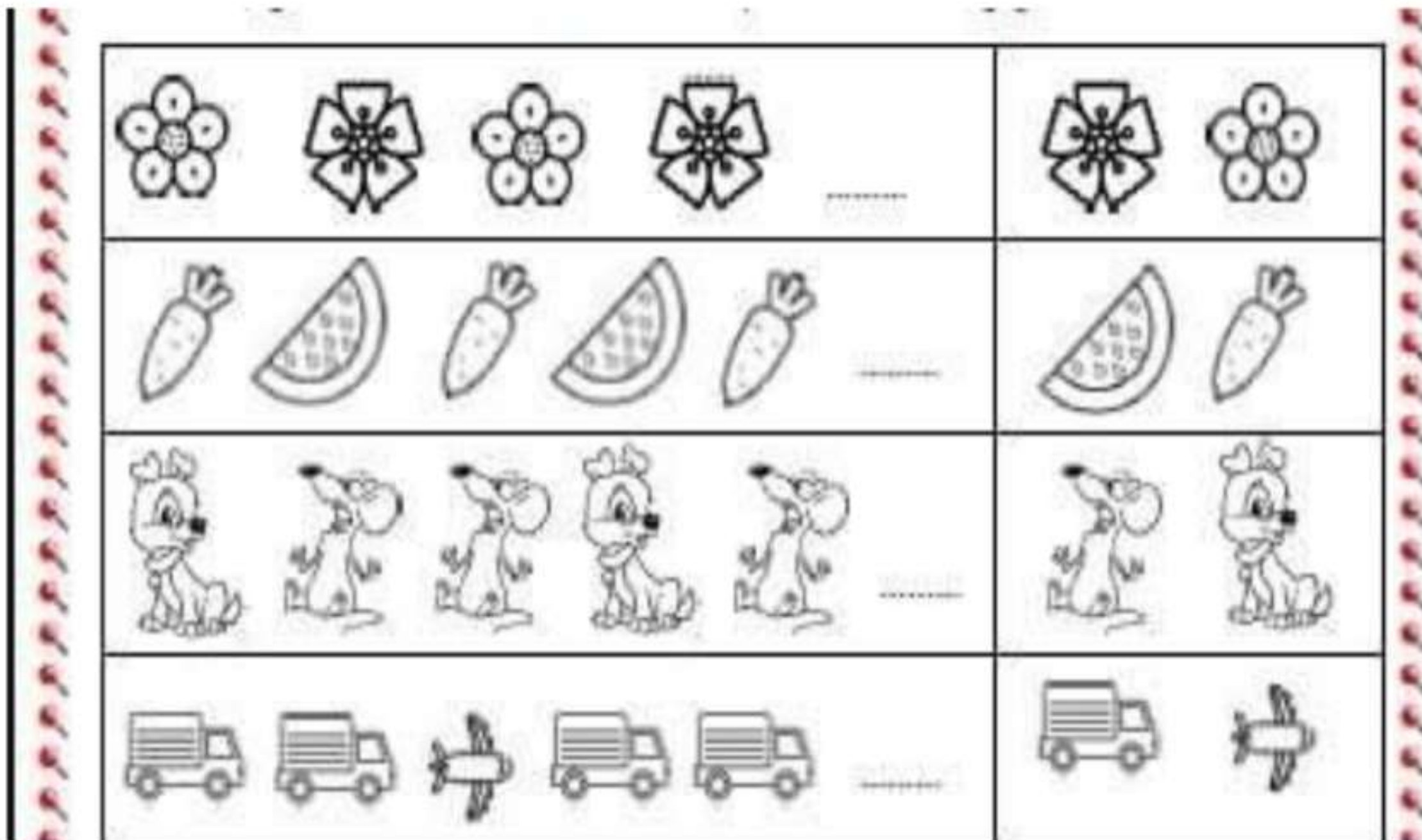
195	119	199
198	200	196
123	124	121

Q3.Let's make numbers using the digits given.

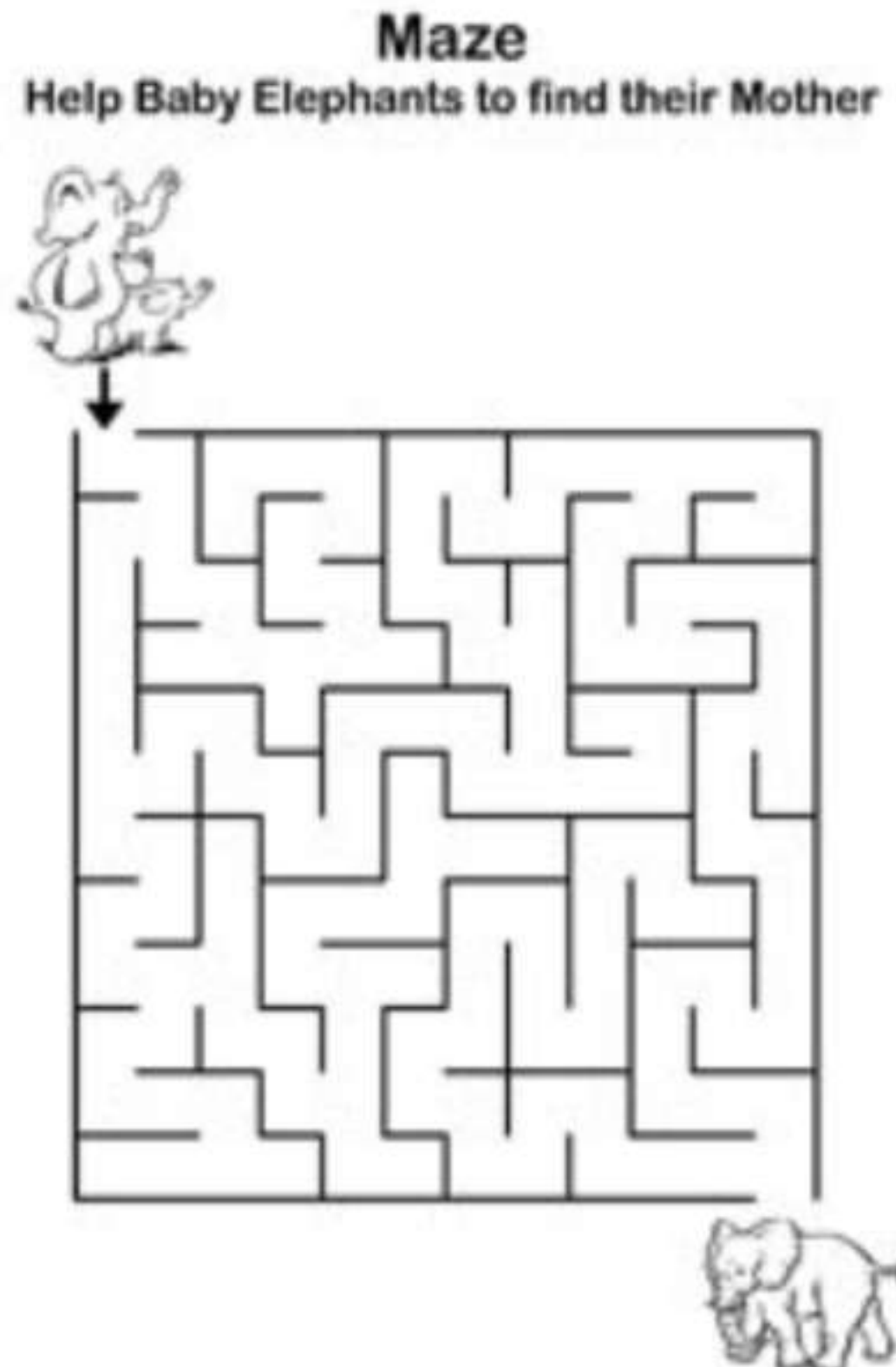



- a. The smallest three digit number.
- b. The greatest three digit number.
- c. Any number between 160 and 180.
- d. A two digit number less than 80.
- e. A two digit number more than 60.


Circle the picture that comes next



Solve these maze





Name: \_\_\_\_\_

Roll No: \_\_\_\_\_

Q1. Tick the correct word to complete the sentence below –

a) The \_\_\_\_\_ is the control center of our body.

☐

brain

☐

heart

b) The \_\_\_\_\_ pumps blood around the body.

☐

stomach

☐

heart

c) We use our \_\_\_\_\_ to breathe



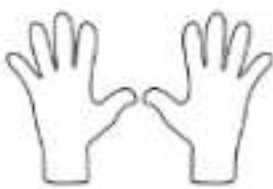


☐

brain

☐

lungs

Q2. Fill in the blanks with the help of given picture –

a) Cut your  \_\_\_\_\_ once a week.b)  \_\_\_\_\_ your teeth twice a day.c) Always drink clean \_\_\_\_\_. d) Wash your  \_\_\_\_\_ before and after meals.e) Comb your  \_\_\_\_\_ properly.f) Take  a \_\_\_\_\_ everyday.g) Wash  \_\_\_\_\_ and  before eating

Name: \_\_\_\_\_

Roll No: \_\_\_\_\_

**Q1. Rearrange the jumble words –**

aorgn - \_\_\_\_\_

velir - \_\_\_\_\_

sgunl - \_\_\_\_\_

ksni - \_\_\_\_\_

bdoy - \_\_\_\_\_

sseen - \_\_\_\_\_

rainb - \_\_\_\_\_

bdloo - \_\_\_\_\_

fdoo - \_\_\_\_\_

htesc - \_\_\_\_\_

**Q2. Guess which body part I am?**

a) I help you to taste food. \_\_\_\_\_

b) I help you to hold and write. \_\_\_\_\_

c) I can regenerate myself. \_\_\_\_\_

d) I help you to feel hot or cold things. \_\_\_\_\_

e) I am the control house of your body. \_\_\_\_\_

f) I provide oxygen to the body. \_\_\_\_\_

g) I am the pumping house of the body. \_\_\_\_\_

h) I give shape to the body. \_\_\_\_\_

i) I help you to walk and run. \_\_\_\_\_

j) I help you to breathe. \_\_\_\_\_